

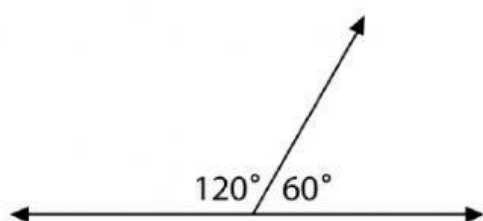
Complementary, Supplementary and Angles at the Point Worksheet

A. State the correct answers for the following questions below.

1. Supplementary angles add up to ____°.
2. Complementary angles add up to ____°.
3. Angles a point adds up to ____°.

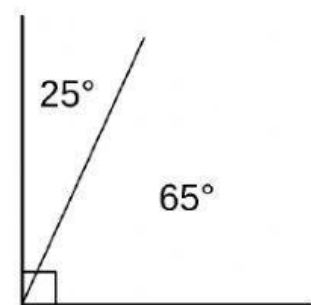
B. State the name of the following images below.

1.



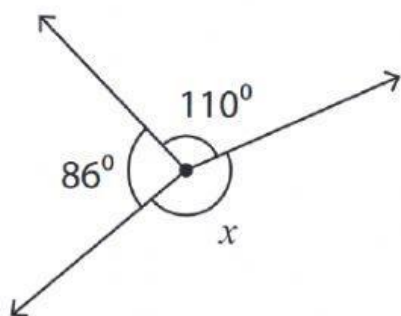
_____ angles

2.



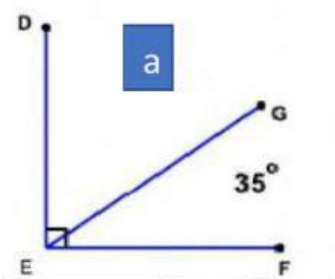
_____ angles

3.



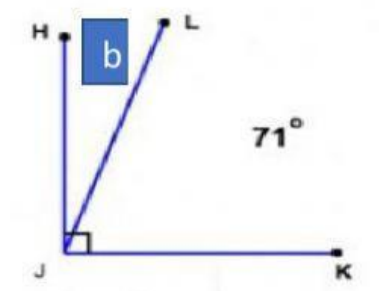
C. Instructions: Calculate the missing angles below.

1.



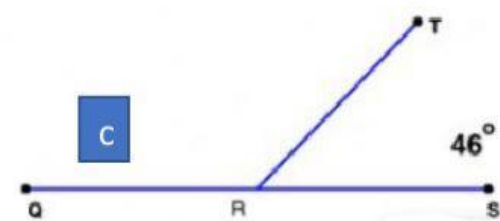
Angle a = _____°

2.



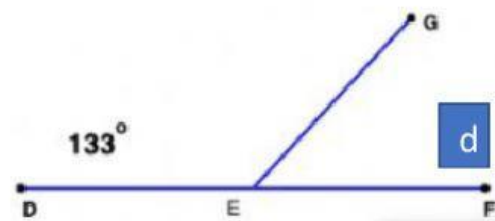
Angle b = _____°

3.



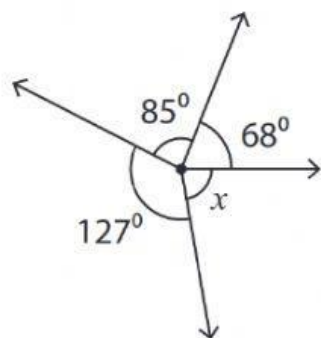
Angle c = _____°

4.



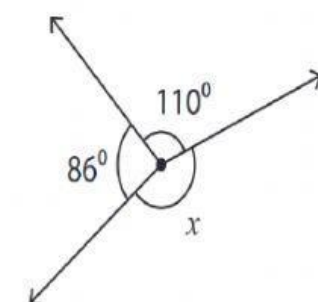
Angle d = _____°

5.



Angle x = _____°

6.



Angle x = _____°