



Name: _____ Date: _____

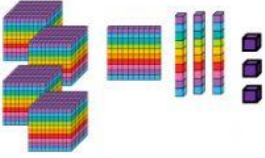
NUMBER FORMS

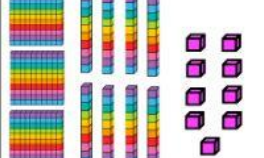
Standard, Expanded, Word and Base 10

Look at the base 10 forms then fill in each black space with the missing forms.

standard	expanded
_____	_____
Number Forms	
word	base 10
_____	

standard	expanded
_____	_____
Number Forms	
word	base 10
_____	

standard	expanded
_____	_____
Number Forms	
word	base 10
_____	

standard	expanded
_____	_____
Number Forms	
word	base 10
_____	

Write the following numbers in word form.

1. 9,387 _____

2. 654 _____

3. 237 _____

4. 4,469 _____

5. 7,625 _____