

Types of Angles

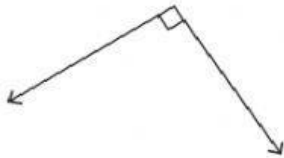
Geometry - Math

Identifying the Types of Angles

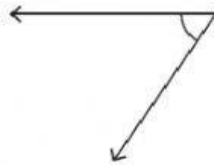
T1S3

Identify each angle as acute, right, obtuse, straight, or reflex.

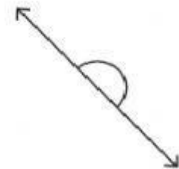
1)



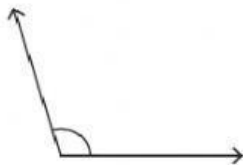
2)



3)



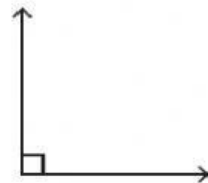
4)



5)



6)



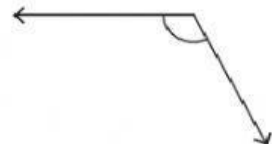
7)



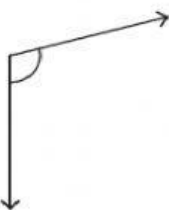
8)



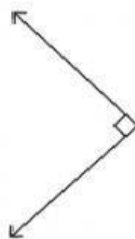
9)



10)



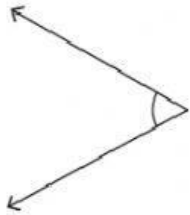
11)



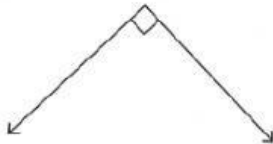
12)



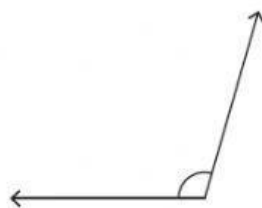
Instructions: Use the pencil to match the angle with its measurement.



This angle measures 180°



This angle measures less than 90°



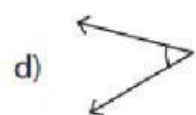
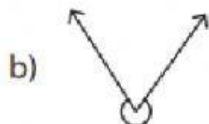
This angle measures 90°



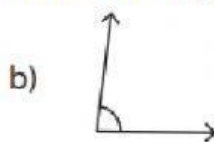
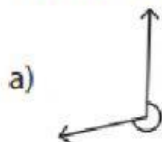
This angle measures more than 90°

Instructions: Choose the correct answer for the following.

C) 1) Which of the following is an obtuse angle?



2) Which of the following is an acute angle?



3) Which of the following is a right angle?

