

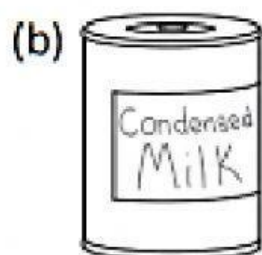
FLAT SURFACES AND CURVED SURFACES

EXERCISE 1:

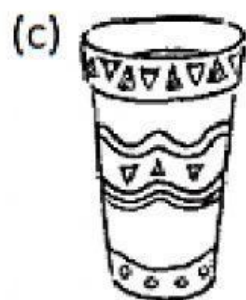
Look at the objects below.
Then, fill in the blanks.




The orange has _____ flat surfaces.



The tin has _____ curved surface.



The vase has _____ flat surface.



The cereal box has _____ curved surfaces.

EXERCISE 2:

How many flat surfaces are there on these objects?



tissue box



paper cup



egg




piece of paper



basketball



library card



cereal box



vase

Drag the name of the objects to match the number of flat surfaces below.

0 flat surfaces

1 flat surface

2 flat surfaces

6 flat surfaces