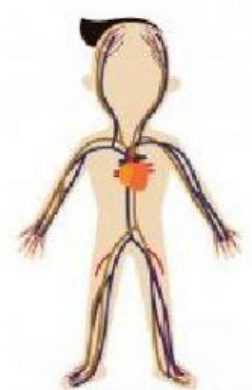
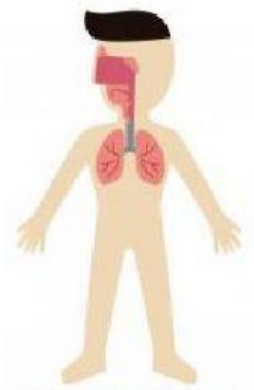


UNIT 5 – SYSTEM (UNIT REVIEW)  
SHORT ANSWER QUESTIONS.  
ANSWER ALL QUESTIONS BELOW.

1. There are **SIX (6)** body systems in humans that help the body to function.

(a) **Label** the body systems below using the words in the boxes.

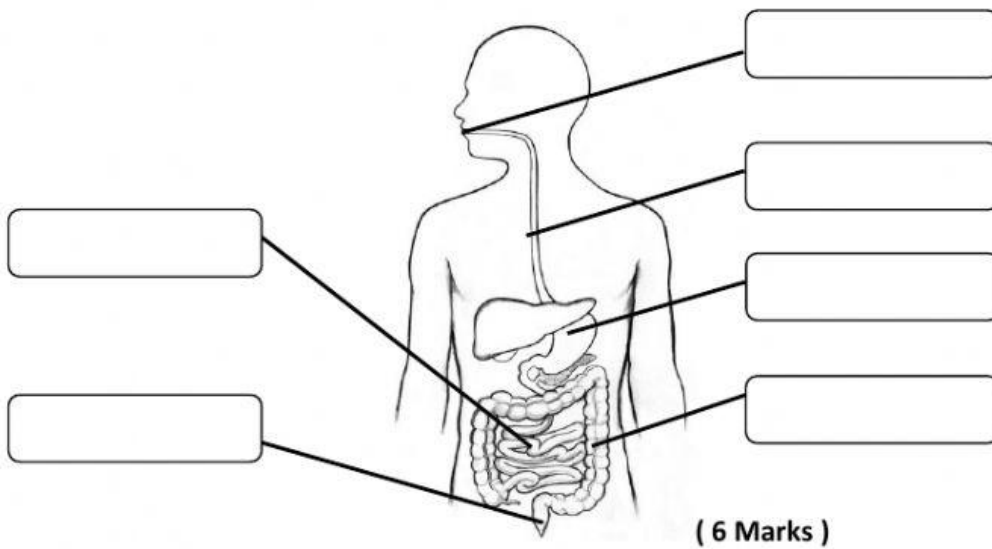
Nervous System	Muscular System	Transport System
Breathing System	Skeletal System	Digestive System



[ 6 Marks ]

1. The picture below shows one of the body systems in humans.

(a) **Label the parts** of this body system.



(b) What is the **name of this body system**?

= \_\_\_\_\_ ( 1 Mark )

(c) In which part of this system does the food being broken down into **soupy liquid**?

= \_\_\_\_\_ ( 1 Mark )

(d) In which part of this system does the most food **absorption** take place?

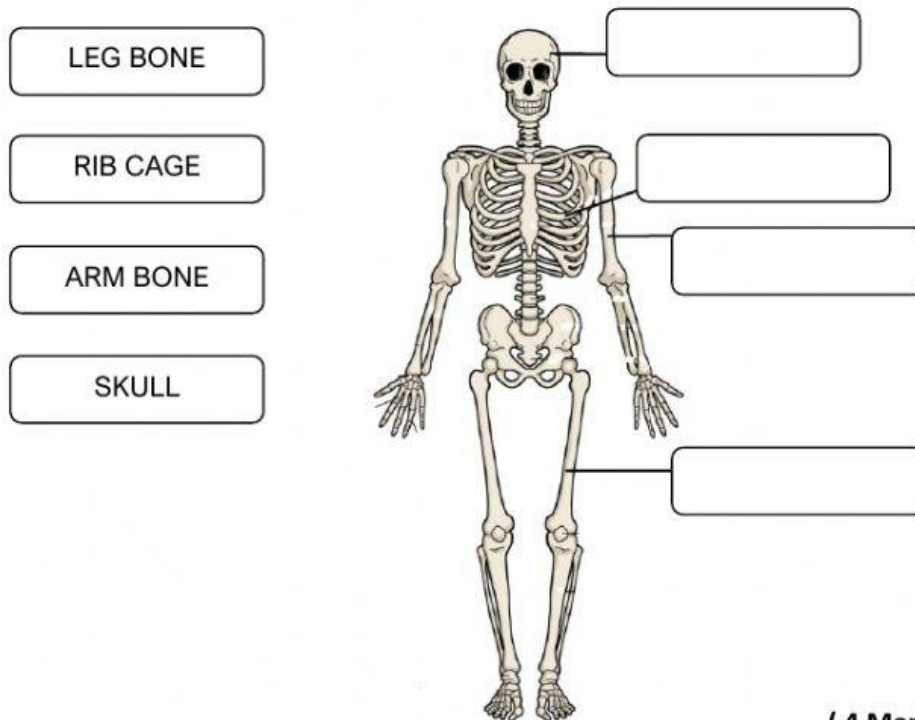
= \_\_\_\_\_ ( 1 Mark )

(e) In which part of this system does **excess water and unwanted food** is removed?

= \_\_\_\_\_ ( 1 Mark )

2. The picture below shows one of the body systems in humans.

(a) **DRAG the parts to label** this body system.



( 4 Marks )

(b) What is the **name of this body system**?

= \_\_\_\_\_ ( 1 Mark )

(c) Which part of this system **protects the brain**?

= \_\_\_\_\_ ( 1 Mark )

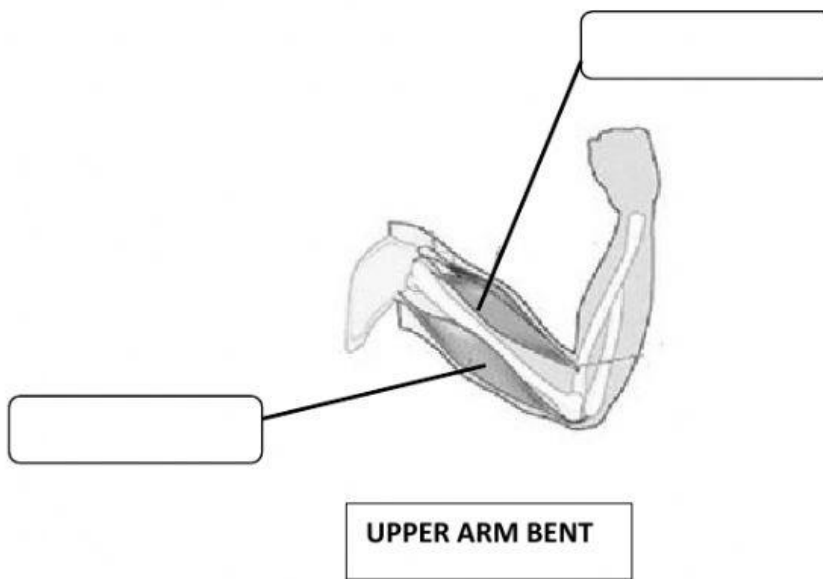
(d) Which part of this system **protects the heart and the lungs**?

= \_\_\_\_\_ ( 1 Mark )

(e) This body system is part of the **movement system**. What is the name of the other movement system beside this one?

= \_\_\_\_\_ ( 1 Mark )

- (f) Look at the picture of upper arm below. Which muscle will get **shorter (shortened)** and which muscle will get **longer (stretched)**? Label the diagram.



( 2 Marks )

3. Drag and Drop the **functions** of digestive system below.

Digestive juice breaks down food into soupy liquid
Most of the water is removed from undigested food
Food is cut and ground into small pieces using teeth and saliva.
Undigested food is stored here as waste
Muscles in its wall push the food from the mouth into the stomach
Most of the absorption takes place here

- i. Mouth = \_\_\_\_\_
- ii. Gullet = \_\_\_\_\_
- iii. Stomach = \_\_\_\_\_
- iv. Small intestine = \_\_\_\_\_
- v. Large intestine = \_\_\_\_\_
- vi. Rectum = \_\_\_\_\_

( 6 Marks )