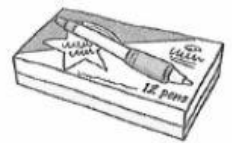


18. Jane mixed 5948 ml of water with 1756 ml of rose syrup to make a rose drink. She poured the rose drink equally into 6 bottles. How much rose drink was there in each bottle?




Ans: \_\_\_\_\_ ml

19. A shopkeeper sold 135 boxes of pens. There were 12 pens in each box. He sold each pen for \$3. How much money did the shopkeeper receive?



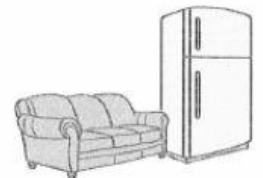
Ans: \$\_\_\_\_\_

20. A shopkeeper sold each table for \$298 and each chair for \$126. How much did the shopkeeper receive for selling 9 tables and 24 chairs?



Ans: \$\_\_\_\_\_

21. Henry bought a refrigerator and a sofa set for \$9600. The sofa set cost \$2500 more than the refrigerator. How much did the refrigerator cost?



Ans: \$\_\_\_\_\_