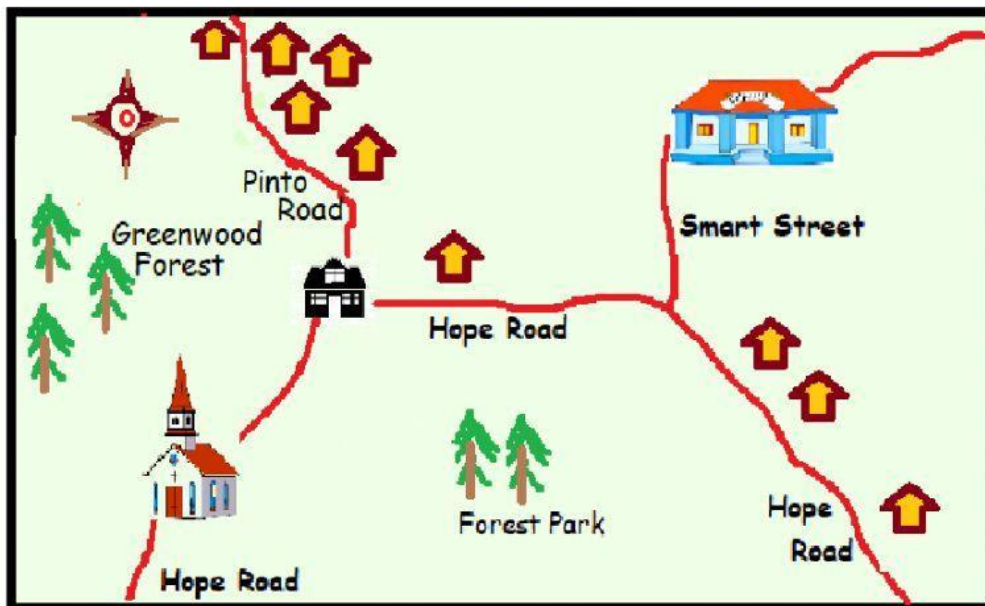


Using a compass to find directions on a map







1. Drag and drop the letters N, S, E and W (in the boxes) to label the cardinal directions North, South, East and West on the compass in the map shown below.

N S E W

A map showing where Peter lives



Key

	Peter's home
	houses
	church
	school
	forest
	road

In the questions below, click on the boxes to select your answers.

2. What place is west of Peter's home? _____
3. If Peter wants to go to school he has to go _____
along Hope Road, then _____ along Smith Street.

4. Forest Park is _____ of the church.