

Weekly Test 1- Mathematics

A. Fill in the missing numbers.

$6 + \underline{\quad} = 12$

$11 - 4 = \underline{\quad}$

11 is more than 10.

12 is more than 11.

B. Solve the word problems. Complete the number statements.

1. Amelia made **11 cupcakes**. She gave away **3 cupcakes**.
How many cupcakes are **left**?

$\underline{\quad} - \underline{\quad} = \underline{\quad}$



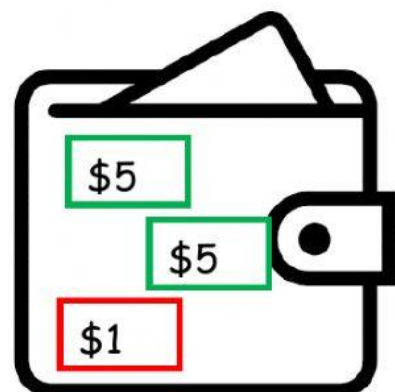
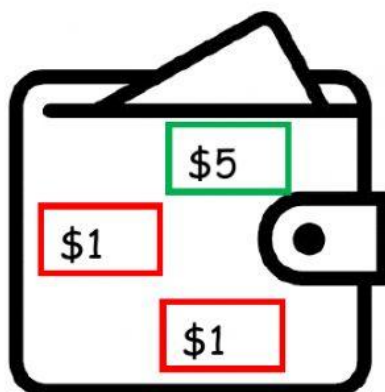
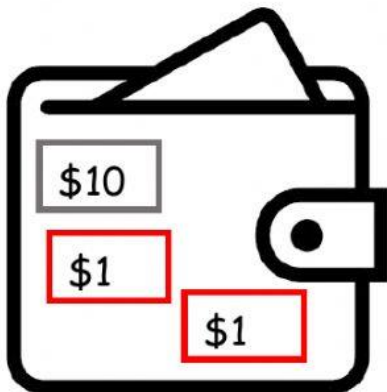
2. Tryce has **8 toy cars**. Giovanni has **4 toy cars**.
How many cars they have **altogether**?

$\underline{\quad} + \underline{\quad} = \underline{\quad}$

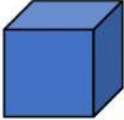






- C. Jadon wants to buy a slice of pizza for **\$11**.




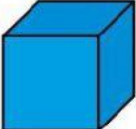

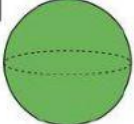

Select the wallet with the correct money.



D. Match the 3D shape to its name.

	cuboid
	cone
	cube
	cylinder
	sphere

E. Select all the correct movements for each shape.

	roll	stack	slide	
				
A		roll	stack	slide
B		roll	stack	slide
C		roll	stack	slide
D		roll	stack	slide