


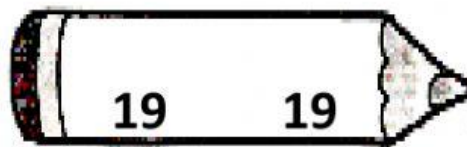




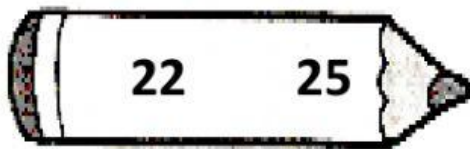
NIVEL INICIAL – 5 AÑOS

NOMBRE:

FECHA: 15/10/2021

1. COMPLETA EL SIGNO QUE CORRESPONDE

SIGNO $>$, $<$, $=$



2. UBICA EN EL TABLERO DE VALOR POSICIONAL LOS SIGUIENTE NÚMEROS

Lee la cantidad y coloca las unidades y decenas en el tablero posicional.



D	U

20

22

24

26

28

30

3. ESCRIBE EL NÚMERO QUE VA ANTES Y DESPUÉS DE

..... 15

..... 20.....

..... 24

..... 15

..... 19

..... 12.....

..... 10

..... 17.....

..... 21

..... 20.....

..... 29

..... 25.....

LA ADICIÓN

$$\begin{array}{|c|c|} \hline D & U \\ \hline 1 & 1 \\ \hline 1 & 2 \\ \hline & \\ \hline \end{array}$$

$$\begin{array}{|c|c|} \hline D & U \\ \hline 1 & 1 \\ \hline 1 & 7 \\ \hline & \\ \hline \end{array}$$

$$\begin{array}{|c|c|} \hline D & U \\ \hline 1 & 5 \\ \hline 1 & 2 \\ \hline & \\ \hline \end{array}$$

$$\begin{array}{|c|c|} \hline D & U \\ \hline 1 & 0 \\ \hline 1 & 6 \\ \hline & \\ \hline \end{array}$$

$$\begin{array}{|c|c|} \hline D & U \\ \hline 1 & 1 \\ \hline 1 & 1 \\ \hline & \\ \hline \end{array}$$

$$\begin{array}{|c|c|} \hline D & U \\ \hline 1 & 7 \\ \hline 1 & 2 \\ \hline & \\ \hline \end{array}$$

$$\begin{array}{|c|c|} \hline D & U \\ \hline 1 & 4 \\ \hline 1 & 1 \\ \hline & \\ \hline \end{array}$$

$$\begin{array}{|c|c|} \hline D & U \\ \hline 1 & 1 \\ \hline 1 & 0 \\ \hline & \\ \hline \end{array}$$

$$\begin{array}{|c|c|} \hline D & U \\ \hline 1 & 0 \\ \hline 1 & 0 \\ \hline & \\ \hline \end{array}$$