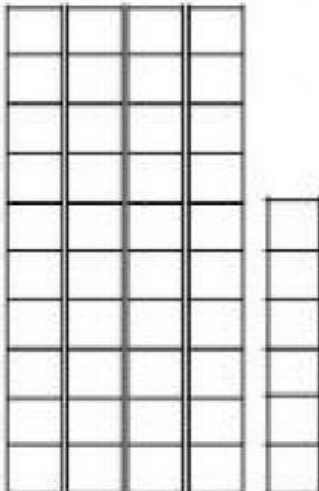




Can you write out the tens and units for these:

	TENS	UNITS		TENS	UNITS		TENS	UNITS
<input type="text"/>	<input type="text"/>	<input type="text"/>	<input type="text"/>	<input type="text"/>	<input type="text"/>	<input type="text"/>	<input type="text"/>	<input type="text"/>



Now try some of these:

58 =	TENS <input type="text"/>	ONES <input type="text"/>	45 =	TENS <input type="text"/>	ONES <input type="text"/>
26 =	TENS <input type="text"/>	ONES <input type="text"/>	74 =	TENS <input type="text"/>	ONES <input type="text"/>

Follow the rule and solve these sums:

+ 5	
2	
4	
1	
3	
5	

+ 3	
1	
4	
5	
3	
2	

+ 6	
2	
4	
3	
1	
5	

Fill in the missing numbers:

