

# Prueba corta

Realiza las siguientes sumas:



$$2 + 2 = \square$$

$$3 + 5 = \square$$

$$5 + 5 = \square$$

$$6 + 1 = \square$$

$$7 + 2 = \square$$

$$8 + 4 = \square$$

Une con una línea cada resta con  
su respuesta

$2-1=$

$6-3=$

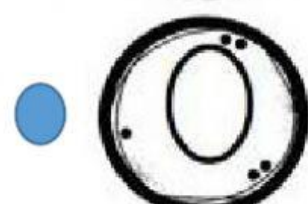
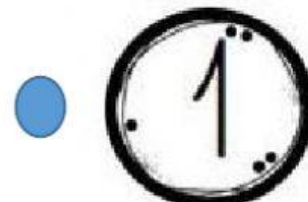


$7-5=$

$8-4=$

$9-1=$

$10-5=$

$5-5=$



# Familia del 50

Escribe los miembros de la familia  
del 50

A worksheet for a family tree activity. It features a house-shaped outline. Inside the triangular roof, there is a circle with a dashed border containing the number 50. The main rectangular body of the house is divided into a 3x3 grid of nine squares, intended for writing the names of family members.
