





Name: _____ Date: _____ Grade: _____

Health Science

Specialized Cells Assignment

A. Identify the specialized cells below. (4)

 1. _____	 2. _____	 3. _____	 4. _____
--	--	--	--

B. Draw a line to match the specialized cell with its function. (4)

Lymphocyte	Transports oxygen around the body.
Red blood cell	To help the body fight infections by engulfing germs or bacteria to
Cardiac muscle cell	Produces antibodies to fight against germs and diseases.
Phagocyte	Contract and relax to make the heart beat

C. Answer the following questions in the spaces provided.

5. Which organelle/structure does the red blood cell lack? (1) _____

6. What pigment gives the red blood cell its color? (1) _____