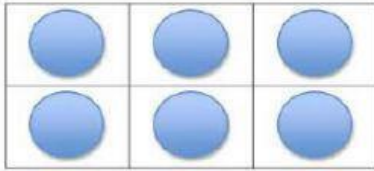


DATE:

NAME:

I. Write the addition & multiplication equation for the given array:

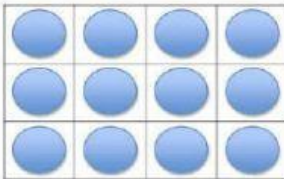
A.



Addition Equation: $\quad + \quad + \quad + \quad =$

Multiplication Equation: $\quad \times \quad =$

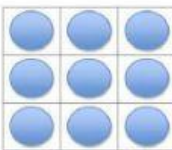
B.



Addition Equation: $\quad + \quad + \quad + \quad + \quad =$

Multiplication Equation: $\quad \times \quad =$

C.



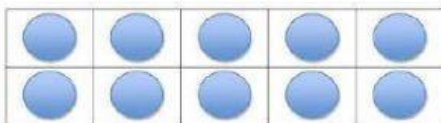
Addition Equation: $\quad + \quad + \quad + \quad =$

Multiplication Equation: $\quad \times \quad =$

DATE:

NAME:

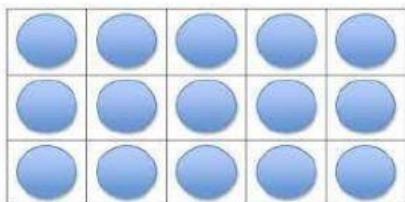
D.



Addition Equation: $\underline{\quad + \quad + \quad + \quad + \quad + \quad =}$

Multiplication Equation: $\underline{\quad \times \quad =}$


E.



Addition Equation: $\underline{\quad + \quad + \quad + \quad =}$

Multiplication Equation: $\underline{\quad \times \quad =}$

F.



Addition Equation: $\underline{\quad + \quad + \quad + \quad + \quad =}$

Multiplication Equation: $\underline{\quad \times \quad =}$