


Multiplication with arrays

Grade 2 Multiplication Worksheet

Complete the equation to describe the array.



$$4 \times \boxed{2} = 8$$



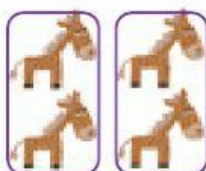
$$\boxed{} \times 4 = 4$$



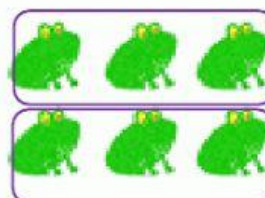
$$\boxed{} \times 3 = 9$$



$$5 \times \boxed{} = 10$$



$$\boxed{} \times 2 = 4$$



$$2 \times \boxed{} = 6$$