

DATE:

NAME:

I. Multiplication: How can you represent the equal groups:

a. 2 equal groups of 5

\_\_\_\_\_

c. 3 equal groups of 3

\_\_\_\_\_

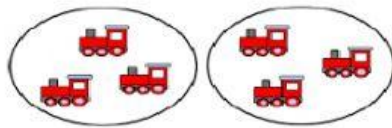
b. 4 equal groups of 3

\_\_\_\_\_

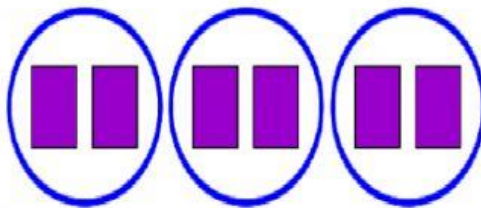
d. 2 equal groups of 4

\_\_\_\_\_

II. Multiplication: How can you represent the equal groups:




\_\_\_\_\_ equal groups of \_\_\_\_\_



\_\_\_\_\_ equal groups of \_\_\_\_\_

DATE:

NAME:



\_\_\_\_\_ equal groups of \_\_\_\_\_

III. Write multiplication equation for the given representation.

a. 3 equal groups of 4

\_\_\_\_\_

a. 2 equal groups of 5

\_\_\_\_\_

b.



\_\_\_\_\_

c.



\_\_\_\_\_