

NAME:

I. Add the given numbers:

A. $865 + 633$

	H	T	O
+	8	6	5
	6	3	3

B. $783 + 359$

	H	T	O
+	7	8	3
	3	5	9

II. Subtract the given numbers:

B. $978 - 653$




	H	T	O
-	9	7	8
	6	5	3

B. $683 - 459$

	H	T	O
-	6	8	3
	4	5	9

NAME:

III. Problem solving strategy having addition & subtraction:

Khalifa has 58 pencils  and his mother gave him 36 pencils  in school he shared his pencils  with his friends. He gave Mubarak 28 pencils. How many pencils are left with Khalifa?

Khalifa has _____ pencils

Mother had given _____ pencils

Total _____ pencils

(Addition) +

Khalifa has _____ pencils

He gave Mubarak _____ pencils

Khalifa is left with _____ pencils

(Subtraction) -