


NAMA :


Pilih jawapan yang betul



$$\frac{1}{2}$$

$$\frac{1}{4}$$

$$\frac{3}{4}$$



$$\frac{1}{2}$$

$$\frac{1}{4}$$

$$\frac{3}{4}$$



$$\frac{1}{2}$$

$$\frac{1}{4}$$

$$\frac{3}{4}$$



$$\frac{1}{2}$$

$$\frac{1}{4}$$


$$\frac{3}{4}$$



$$\frac{1}{2}$$

$$\frac{1}{4}$$


$$\frac{3}{4}$$



$$\frac{1}{2}$$

$$\frac{1}{4}$$

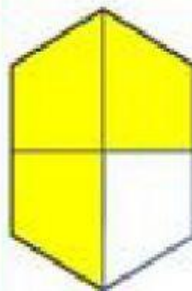
$$\frac{3}{4}$$



$$\frac{1}{2}$$

$$\frac{1}{4}$$


$$\frac{3}{4}$$



$$\frac{1}{2}$$

$$\frac{1}{4}$$

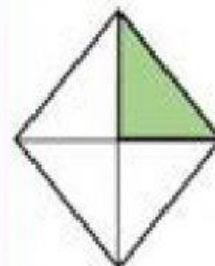
$$\frac{3}{4}$$



$$\frac{1}{2}$$

$$\frac{1}{4}$$

$$\frac{3}{4}$$



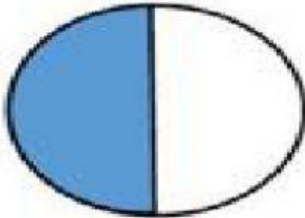
$$\frac{1}{2}$$

$$\frac{1}{4}$$

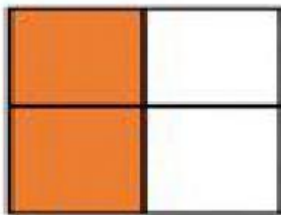
$$\frac{3}{4}$$

NAMA :

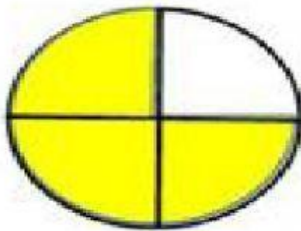
Padankan pecahan yang betul



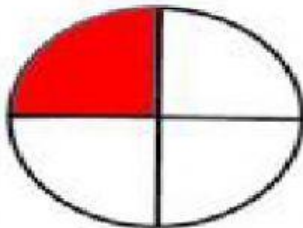
dua perempat




dua pertiga




satu pertiga



tiga perempat



satu perdua



satu perempat