









**Add or Subtract.** (Drag the ice cream top to the correct place.)

1. <div></div> 	2. <div></div> 	3. <div></div> 	4. <div></div> 
5. <div></div> 	6. <div></div> 	7. <div></div> 	8. <div></div> 



**Read and answer the word problem below. (Choose and click the correct answers.)**

**1. Ain ate 7 sweets on Monday.**

**She ate 12 sweets on Tuesday.**

**How many sweets did she eat altogether in the two days?**

**a)  $12 - 7 = 5$**

**She ate 5 sweets in two days.**

**b)  $7 + 12 = 19$**

**She ate 19 sweets in two days.**

**2. Faris had 18 rulers.**

**He gave 7 rulers to his friends.**

**How many rulers did he have left?**

**a)  $18 - 7 = 11$**

**He had 11 rulers left.**

**b)  $18 + 7 = 25$**

**He had 25 rulers left.**