

LEMBAR KERJA PESERTA DIDIK
MATEMATIKA KD 3.3
SDN 056 GARUDA DADALI

Nama :

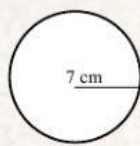
Kelas :

No Absen :

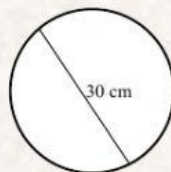
Hari/Tanggal : Kamis, 7 Oktober 2021

Ayo, kerjakan soal-soal berikut!

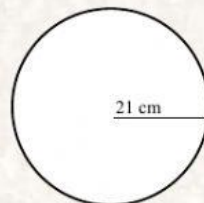
1. Hitunglah keliling-keliling berikut!



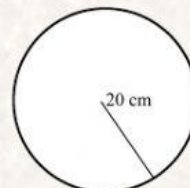
K = cm



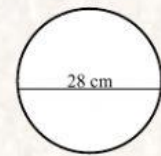
K = cm



K = cm



K = cm



K = cm

2. Tentukan diameter dan jari-jari lingkaran, jika diketahui kelilingnya berikut!

a. $K = 44$ cm

$d = \dots\dots\dots$ cm

$r = \dots\dots\dots$ cm

b. $K = 110$ cm

$d = \dots\dots\dots$ cm

$r = \dots\dots\dots$ cm

c. $K = 125,6$ cm ($\Phi 3,14$)

$d = \dots\dots\dots$ cm

$r = \dots\dots\dots$ cm

d. $K = 314$ cm ($\Phi 3,14$)

$d = \dots\dots\dots$ cm

$r = \dots\dots\dots$ cm

e. $K = 880$ cm

$d = \dots\dots\dots$ cm

$r = \dots\dots\dots$ cm