

### CONVERT SECONDS INTO MINUTES.

(a) 80 seconds = 1 min 20 s

$$\begin{array}{r} - 60 \text{ s} \\ 20 \text{ s} \end{array}$$

$1 \text{ min} = 60 \text{ s}$

$2 \text{ min} = 120 \text{ s}$

$3 \text{ min} = 180 \text{ s}$

$4 \text{ min} = 240 \text{ s}$

$5 \text{ min} = 300 \text{ s}$

$6 \text{ min} = 360 \text{ s}$

$7 \text{ min} = 420 \text{ s}$

(b) 185 seconds = 3 min 5 s

$$\begin{array}{r} - 180 \text{ s} \\ 005 \text{ s} \end{array}$$

(c) 296 seconds = 4 min 56 s

$$\begin{array}{r} - 240 \text{ s} \\ 056 \text{ s} \end{array}$$

LEARNING OBJECTIVES: To be able to use  $1 \text{ min} = 60 \text{ s}$  to convert seconds to minutes and seconds to minutes and seconds.

### Step to success:

1. List down the conversion of minutes to seconds. (multiples of 60).
2. Choose exact or closest but smaller number of seconds.
3. Write the answer in minute.
4. Find the remainder.
5. Write the remainder in seconds.
6. Write final answer in mins and s.

1. Give your answers in minutes.

(a)  $120 \text{ s} = \underline{\hspace{2cm}} \text{ min}$

(b)  $360 \text{ s} = \underline{\hspace{2cm}} \text{ min}$

(c)  $180 \text{ s} = \underline{\hspace{2cm}} \text{ min}$

(d)  $480 \text{ s} = \underline{\hspace{2cm}} \text{ min}$

2. Give your answers in minutes and seconds.

(a)  $85 \text{ s} = 60 \text{ s} + \underline{\hspace{2cm}} \text{ s}$

(b)  $139 \text{ s} = 120 \text{ s} + \underline{\hspace{2cm}} \text{ s}$

$$= \underline{\hspace{2cm}} \text{ min } \underline{\hspace{2cm}} \text{ s}$$

$$= \underline{\hspace{2cm}} \text{ min } \underline{\hspace{2cm}} \text{ s}$$

(c)  $362 \text{ s} = \underline{\hspace{2cm}} \text{ min } \underline{\hspace{2cm}} \text{ s}$

(d)  $510 \text{ s} = \underline{\hspace{2cm}} \text{ min } \underline{\hspace{2cm}} \text{ s}$

(e)  $278 \text{ s} = \underline{\hspace{2cm}} \text{ min } \underline{\hspace{2cm}} \text{ s}$

(f)  $191 \text{ s} = \underline{\hspace{2cm}} \text{ min } \underline{\hspace{2cm}} \text{ s}$

Hidayah A/2021

3.

Match.

72 s

9 min 50 s

3 min 30 s

210 s

590 s

10 min

2 min 35 s

1 min 12 s

365 s

155 s

4 min 48 s

318 s

5 min 18 s

6 min 5 s




600 s

288 s

---

### HOW DO YOU FEEL ABOUT TODAY'S LESSON?

Write your name in the box you have chosen.

*Hidayah A / 2021*