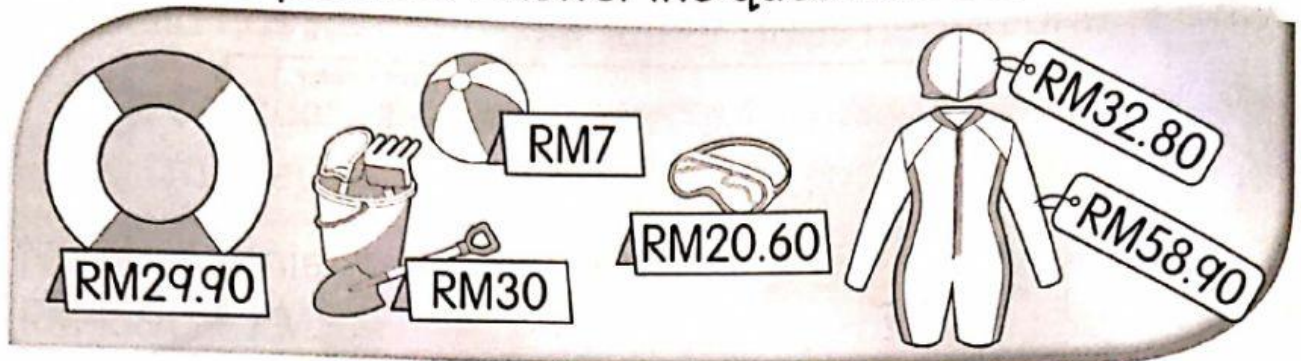








MIND TEASER

Look at the pictures. Answer the questions below.




- a** Calculate the total price of  and .

$$\begin{array}{r} \square\square \\ \text{RM } 29.90 \\ + \text{RM } 20.60 \\ \hline \text{RM } \square.\square \end{array}$$

- b** Aida's mother has RM100. She bought  and . Calculate the balance of her money.

$$\begin{array}{r} \square\square \\ \text{RM } 32.80 \\ + \text{RM } 58.90 \\ \hline \text{RM } \square.\square \end{array}$$

Balance : $\begin{array}{r} 099 \\ \text{RM } 100.00 \\ - \text{RM } \square.\square \\ \hline \text{RM } \square.\square \end{array}$

- c** What is the price of 6 .

$$\begin{array}{r} \text{RM } 7 \\ \times \quad 6 \\ \hline \text{RM } \square \end{array}$$

- d** 5 persons share money to buy . How much does each of them pay?

$$\begin{array}{r} \text{RM } \square \\ 5 \overline{) \text{RM } 30} \\ \underline{30} \\ 0 \end{array}$$