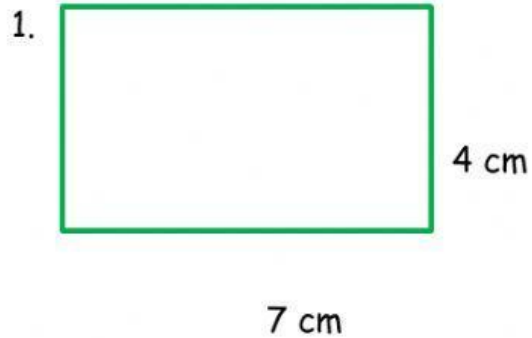


Name :

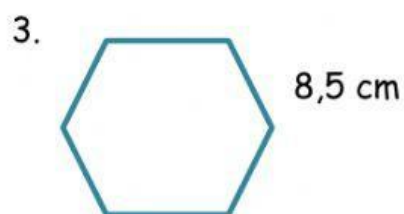
Class :

Perimeter and area



The perimeter of the rectangle above is ...

2. The length of each side of a square is 5 cm, so the perimeter of the square is ...



Look at the picture ! The length of each side is 8,5 cm, so, the perimeter of the shape is ....

4. The perimeter of this shape is .....

$5\frac{1}{2}$  cm



6 cm

5. The area of a square which length of each side is 2 cm is ....

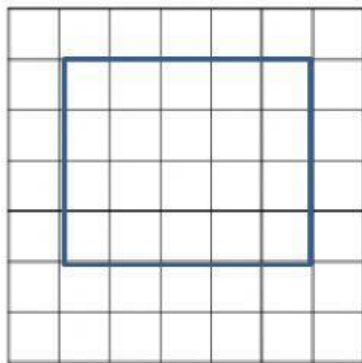
6. Look at this shape !



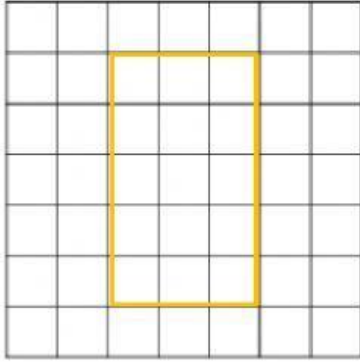
5 cm

8 cm

The area of the shape is ....



7. The perimeter of this square is .....  
square units



8.

units

The area of this square is ..... square