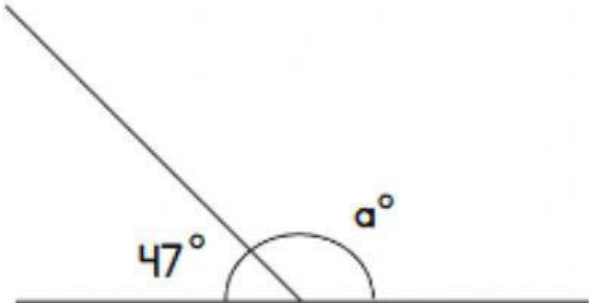
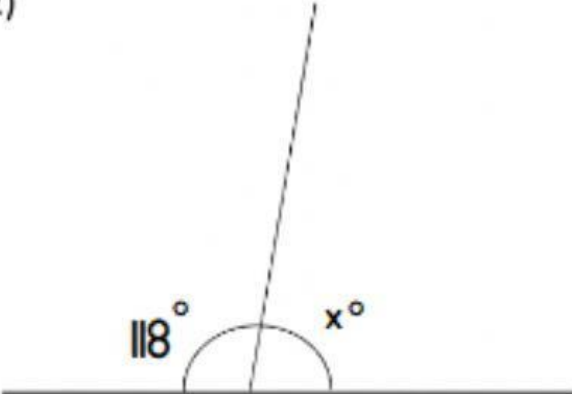
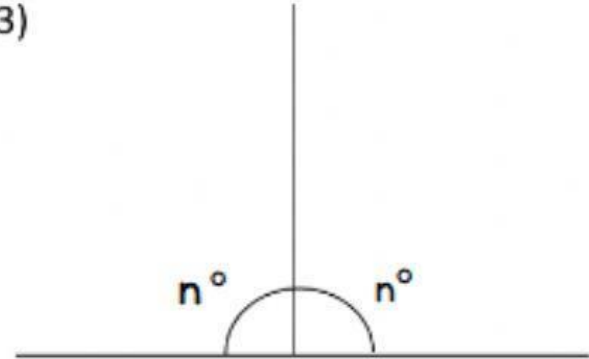
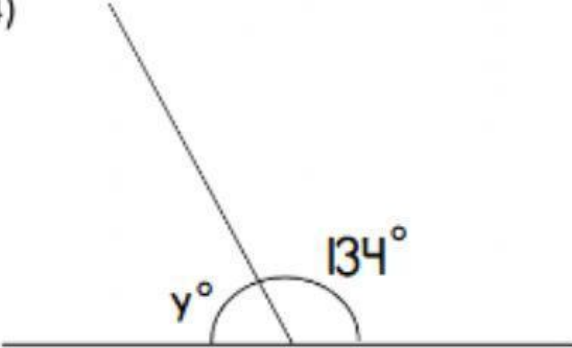
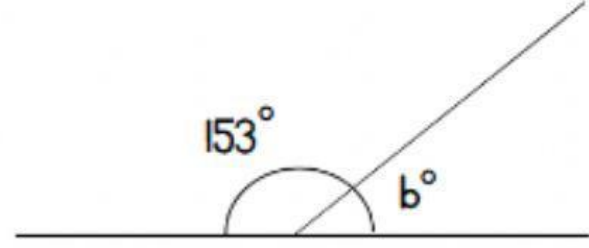
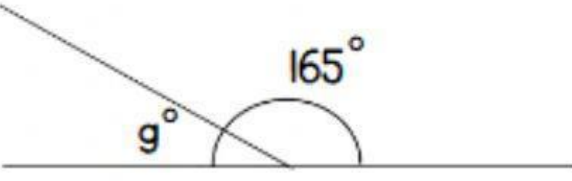


Determining Angles

Remember, the two angles should add up to 180° because they are in a straight line!

1) 	2) 
3) 	4) 
5) 	6) 

Work out the missing angles. Write them below.

1) $a = \underline{\hspace{2cm}}^\circ$ 2) $x = \underline{\hspace{2cm}}^\circ$ 3) $n = \underline{\hspace{2cm}}^\circ$

4) $y = \underline{\hspace{2cm}}^\circ$ 5) $b = \underline{\hspace{2cm}}^\circ$ 6) $g = \underline{\hspace{2cm}}^\circ$