









Toán

Phép cộng có tổng bằng 10

Nối hai hình để có tổng số con chó là 10

Ví dụ: A và K

A	B	C	D
			
E	H	K	M
			



Tìm số, biết ba số theo hàng ngang hay cột dọc đều có **tổng là 10**



....	5
3	7	3
3	2

The grid is part of a larger 3x3 grid. The top row has three cells: the first and third are empty (....), the second contains 5. The middle row has three cells: the first contains 3, the second contains 7, and the third contains 3. The bottom row has three cells: the first contains 3, the second and third are empty (....). Red brackets group the numbers in rows and columns. The top row is bracketed with '10'. The middle row is bracketed with '10'. The bottom row is bracketed with '10'. The first column is bracketed with '10'. The second column is bracketed with '10'. The third column is bracketed with '10'. The background is an underwater scene with sea turtles and coral.