


Complete by filling in the correct answer

$0 \times 4 =$		$9 \times 3 =$		3 groups of 2	
$12 \times 2 =$		$6 \times 5 =$		5 groups of 5	
$3 \times 10 =$		$10 \times 10 =$		8 groups of 3	

## 2. Choose the correct answer

Count these objects, use grouping as a strategy.



2.1 In what did you count in/ Select the correct answer

2's	5's	3's	10's
-----	-----	-----	------

2.2 How many groups of five did you count?

12 groups	5 groups	11 groups	10 groups
-----------	----------	-----------	-----------


2.3 How many pencils are in 1 group


2 pencils	5 pencils	3 pencils	10 pencils
-----------	-----------	-----------	------------

2.4 Write it now as addition sum (repeat addition)

2.5 Write it now as a multiplication sum

2.6 Calculate the following using the breaking up method

	$155 + 244 =$	H	T	U	
=	+	+			
=	+	+			
=	+	+			


	$468 - 133 =$	H	T	U	
=	+	+			
=	+	+			
=	+	+			

2.7 Double and halve of numbers/ Select the correct answer

a.	Double of 100	50	100	200
b.	Halve of 100	200	20	50
c.	Double of 250	300	500	175
d.	Halve of 300	100	200	150
e.	Double of 60	210	120	30

2.8 Order the following numbers from **smallest to biggest**

Drag the number to the correct place.



$278$	$197$	$198$	$289$	$279$