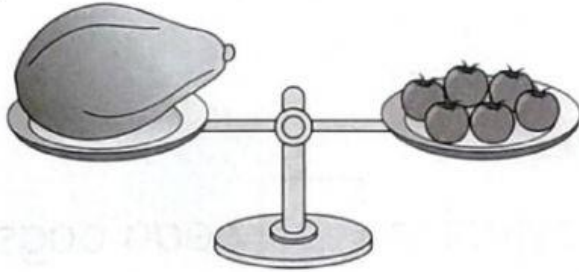


Activity 2

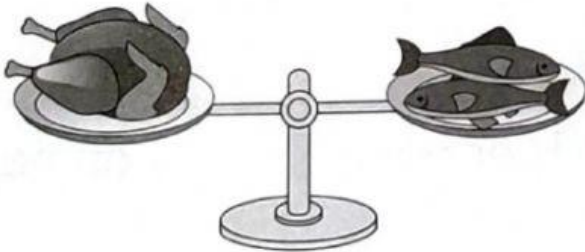
Write the correct number of units.

a



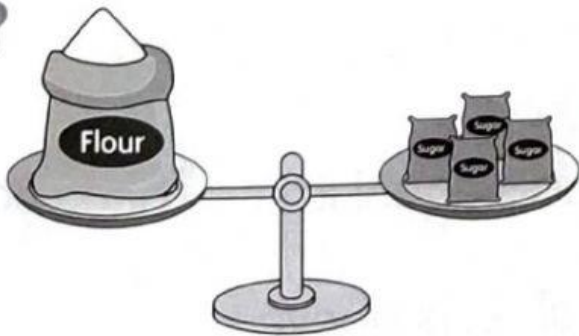
The mass of the papaya is equal to tomatoes.

b




The mass of the chicken is equal to fish.

c



The mass of the sack of flour is equal to packets of sugar.

d

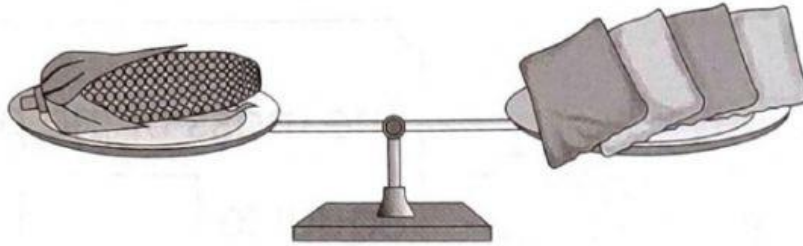


The mass of the fish is equal to squids.

Activity 3

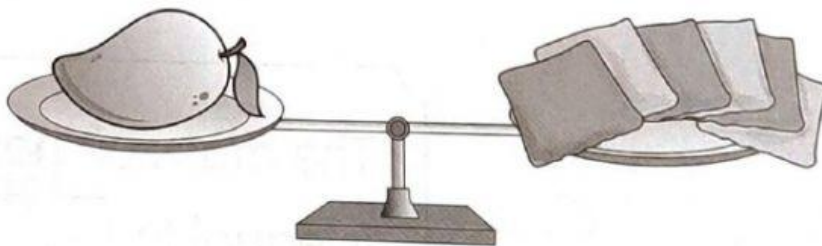
1 Write the correct number of units.

a



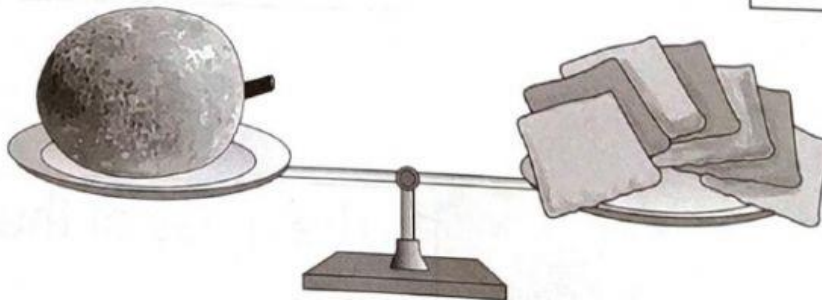
The mass of the corn is equal to bean bags.

b



The mass of the mango is equal to bean bags.

c



The mass of the breadfruit is equal to bean bags.

2 Compare the mass of the objects above.

a The mass of the corn is than the mango.

b The mass of the breadfruit is than the mango.

c The heaviest fruit is the .

d The lightest fruit is the .