

Year Two

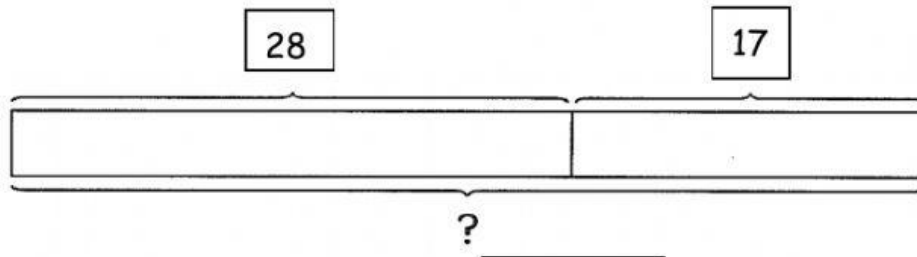
Math Review - Unit 4

Word Problems: Addition & Subtraction

Name: _____ Date: _____

Find the missing numbers. Then solve.

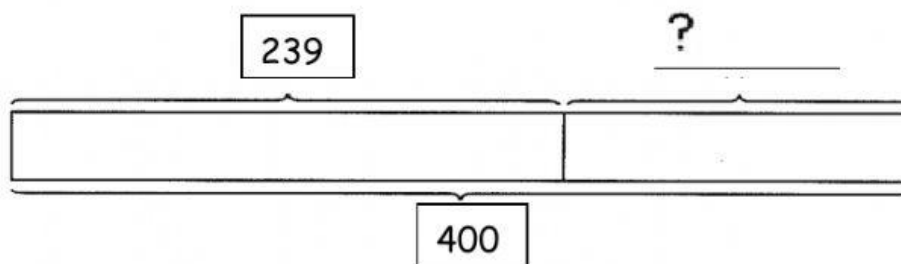
1. There are 28 boys and 17 girls in a class.
How many pupils are there altogether?



$$\square \bigcirc \square = \square$$

There are _____ pupils altogether.

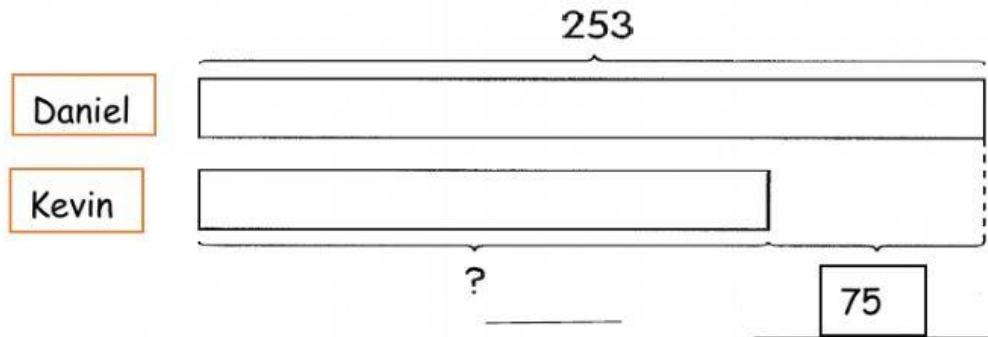
2. Tom had 400 toys.
239 of them are red toys and the rest are blue toys.
How many blue toys does Tom have?



$$\square \bigcirc \square = \square$$

Tom has _____ blue toys.

3. Daniel scores 253 points in a game.
Kevin scores 75 fewer points than Daniel.
How many points does Kevin score?



$$\square \bigcirc \square = \square$$

Kevin scores _____ points.