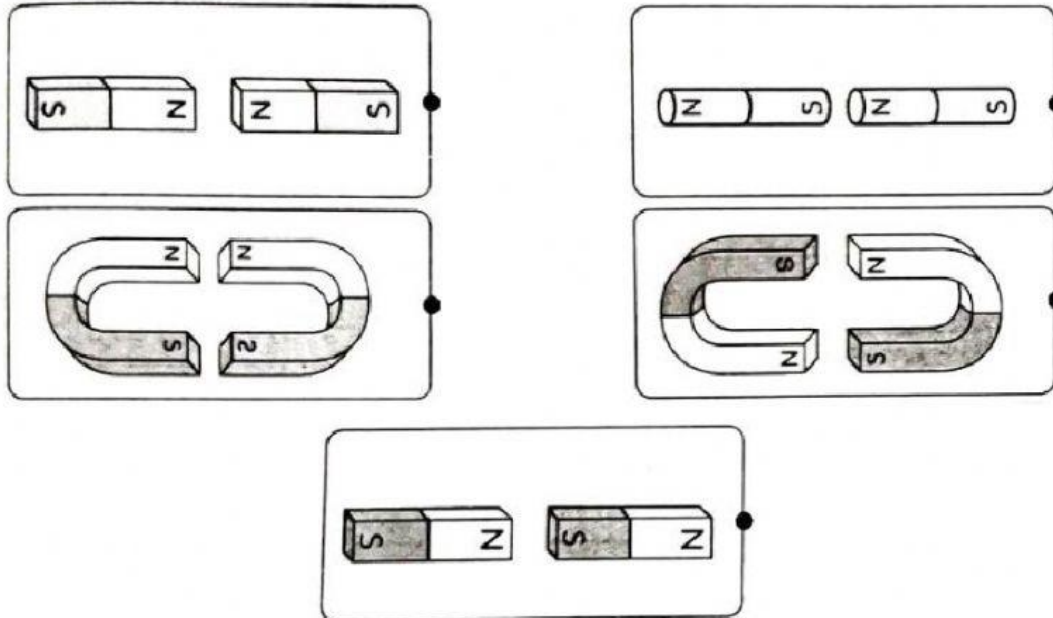


SCIENCE YEAR 1
MAGNETS (PART 3)

Name:

Date:

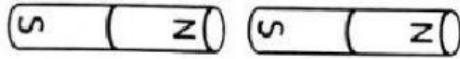
Instruction: Choose the correct magnetic actions.



Instruction: Complete the sentences below.

1. Two magnets with different poles will _____ when brought close together.
2. Two magnets with the same poles will _____ when brought close together.

Instruction: Choose or select the correct answer.



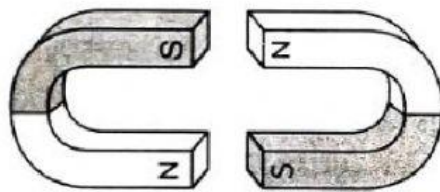
attract

repel



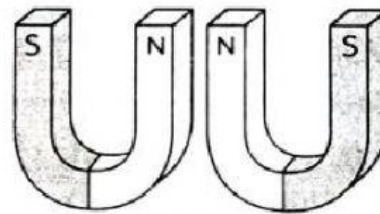
attract

repel



attract

repel



attract

repel

Instruction: Complete the sentences below.

1. Two magnets with _____ poles will attract when brought close together.
2. Two magnets with the _____ poles will repel when brought close together.