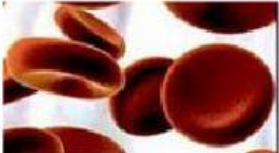




NAME : _____ YEAR : _____ DATE : _____

BLOOD

S2S : Look at the blood component below. Drag the name and function to the correct cell.

Red blood cell	Platelets	White blood cell
Help blood clot	Carry oxygen to all parts of the body	Produce antibodies to kill the germs or fight any infection

			
Name of blood component			
Function of blood component			

S2S : Write RED BLOOD CELL or WHITE BLOOD CELL in response to each statement below.

1. It fights any infection that might enter the body. _____
2. It contains a pigment called haemoglobin. _____
3. It transports oxygen around the body. _____
4. Some of it engulfs germs and destroys them. _____
5. Some release antibodies to fight germs. _____