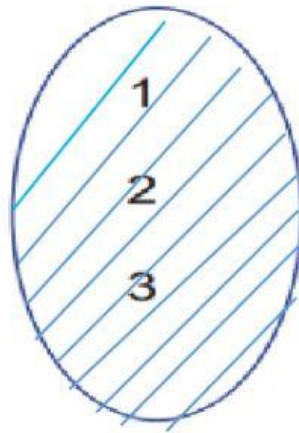
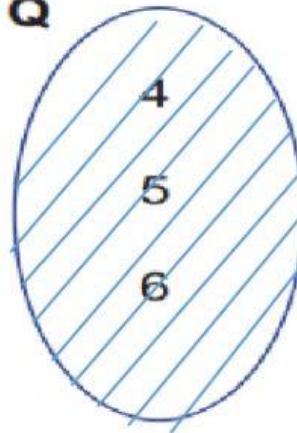
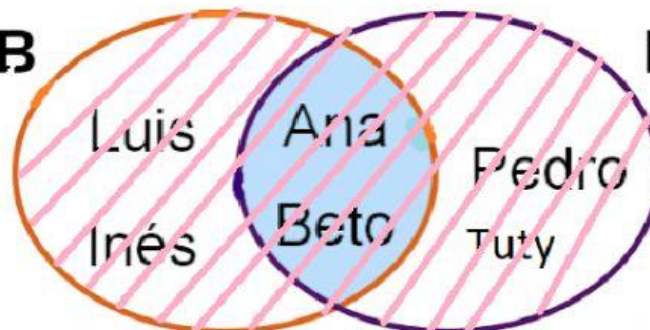




Operaciones con conjuntos

Observa los conjuntos y completa:

P**Q** $P = \{ \underline{\hspace{2cm}} \}$ $Q = \{ \underline{\hspace{2cm}} \}$ $P \cup Q = \{ \underline{\hspace{2cm}} \}$ **B****N** $B = \{ \underline{\hspace{1cm}}, \underline{\hspace{1cm}}, \underline{\hspace{1cm}}, \underline{\hspace{1cm}} \}$ $N = \{ \underline{\hspace{1cm}}, \underline{\hspace{1cm}}, \underline{\hspace{1cm}}, \underline{\hspace{1cm}} \}$ $B \cup N = \{ \underline{\hspace{2cm}} \}$ 