




Counting Blocks

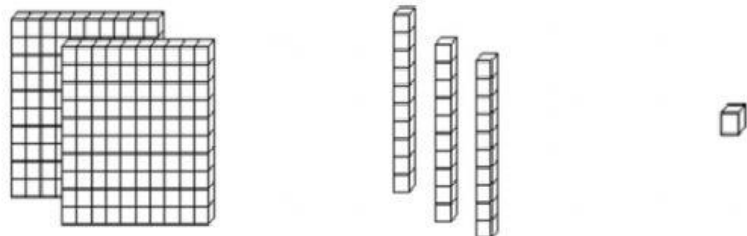
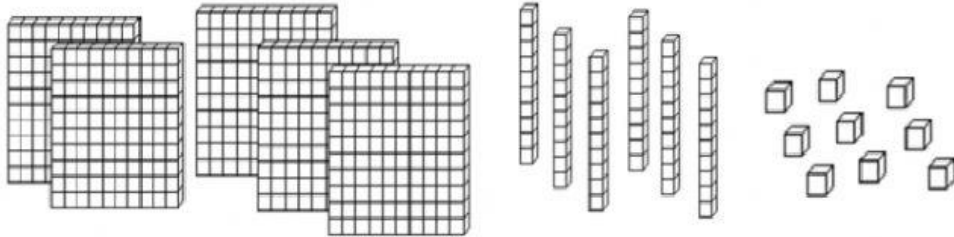
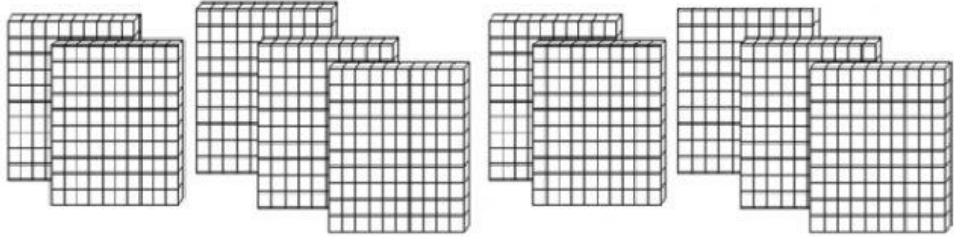
Sets of 100 blocks, 10 blocks and 1 block are shown below

 <p>has 100 blocks</p>	 <p>has 10 blocks</p>	 <p>is one block</p>
---	--	---

Count the number of blocks in each set shown below and type in your answer to the right under -

e.g.

Thousands	Hundreds	Tens	Ones
0	4	5	3

<p>1</p> 	<p style="text-align: right;">Th H T O</p>
<p>2</p> 	<p style="text-align: right;">Th H T O</p>
<p>3</p> 	<p style="text-align: right;">Th H T O</p>