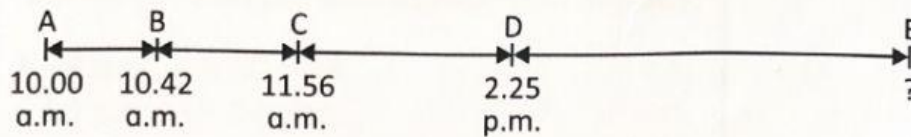


## Practice 5 Solving Word Problems

1. Azman drove from Town A to Town E. The diagram shows the time he left Town A and the times he reached Towns B to E.



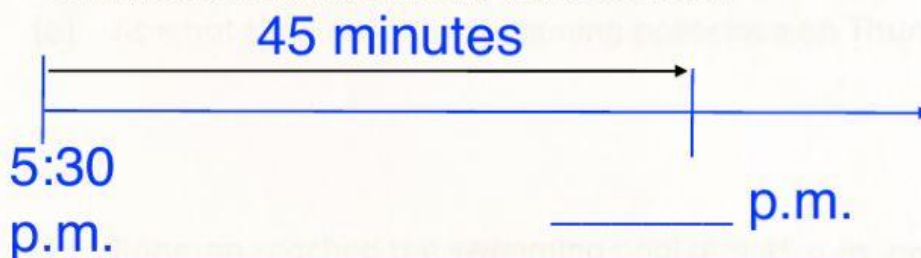
- (a) The time Azman took to drive from

- Town A to Town B is \_\_\_\_\_ h \_\_\_\_\_ min.
- Town B to Town C is \_\_\_\_\_ h \_\_\_\_\_ min.
- Town C to Town D is \_\_\_\_\_ h \_\_\_\_\_ min.

- (b) Azman took 7 h 15 min to drive from Town D to Town E.

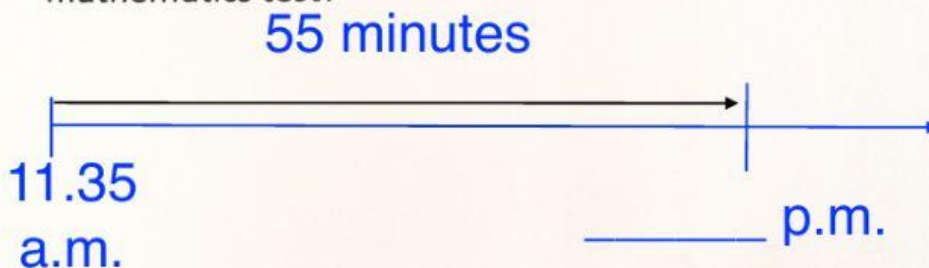
He reached Town E at \_\_\_\_\_ p.m.

2. Siti began her ballet lesson at 5.30 p.m. The lesson lasted 45 minutes. At what time did the lesson end?



Her lesson ended at \_\_\_\_\_ p.m.

3. A mathematics test began at 11.35 a.m. Junaidah finished the test in 55 minutes. At what time did Junaidah finish her mathematics test?




Her lesson finished at \_\_\_\_\_ p.m.

4. A wedding dinner ended at 11.05 p.m. The dinner lasted 3 h 10 min. At what time did the dinner start?

Working


3 hours 10 minutes



The dinner started at \_\_\_\_\_ p.m.

5. A football match lasted 1 h 45 min. The match ended at 6.45 p.m. At what time did the football match start?

1 hours 45 minutes



The match started at \_\_\_\_\_ p.m.

6. Faizal arrived at the swimming club at 3.20 p.m. He took 42 minutes to travel from his house to the club. At what time did he leave his house?

*You may write the working on a piece of paper.*

*You may follow the workings above.*

*Then, Type out the answer below.*

He left the house at \_\_\_\_\_ p.m.