
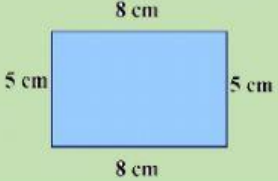
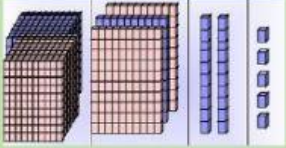




LESSON #3

$9 + ? = 18$	Tell whether 989 is an <u>ODD</u> or an <u>EVEN</u> number.	How many <u>seconds</u> are in a <u>minute</u> ?	Jane is studying for her spelling test. She knows 11 of her 20 words. How many words does she not yet know?
$6 \times 6 = ?$	$3,655 \bigcirc 3,656$	Write 3, 219 in <u>expanded form</u> .	Which digit is in the hundreds place in the numeral 654, 906 ?
Name the underlined part of the multiplication sentence <u>345</u> $\times 25 = 8,625$	Round 35, 823 to the <u>nearest ten</u>	Give the name of the shape below 	$600 - 241 = ?$

Bill bought a new shirt for \$49.99 and a new Jeans for \$29.50. How much did Bill spend on his outfit?	$937 + 258 = ?$	Arrange the following numbers in ascending order. 864 684 468 648	What is the perimeter of the following shape? 
Name the part of the subtraction sentence that is underlined. $345 - 16 = \underline{329}$	From the division sentence, write the number that is the quotient . $369 \div 3 = 123$	$6 \times 8 = ?$	What is the number shown 

How many fiction books are there?

Which type of book has the fewest copies?

TYPE of BOOK	NUMBER
Fiction	1, 478
Business	1, 208
Biography	752
Math	410
Art	105
Travel	85
drama	21

