

## Tiger 3 Unit 5

### Telling the time



What time is it?

2:00

It's two o'clock









What time is it?

2:30

It's half past two  
or ... It's two thirty

1.- Match the pictures to the times.

It's twelve o'clock	It's half past three	It's three o'clock	It's nine o'clock	It's half past nine	It's half past twelve
---------------------	----------------------	--------------------	-------------------	---------------------	-----------------------

2.- Write the times (Recuerda empezar con It's ...).





