










A. Tuliskan ayat matematik darab.

	$1 \times 3 = 3$
	
	
	
	
	
	
	
	

**B.** Lengkapi ayat matematik bagi sifir 3.

**Contoh:**

1.  $2 \times 3 = \boxed{6}$

2.  $6 \times \boxed{\phantom{00}} = 18$

3.  $\boxed{\phantom{00}} \times 3 = 12$

4.  $1 \times 3 = \boxed{\phantom{00}}$

5.  $\boxed{\phantom{00}} \times 3 = 27$

6.  $7 \times 3 = \boxed{\phantom{00}}$

7.  $8 \times \boxed{\phantom{00}} = 24$

8.  $\boxed{\phantom{00}} \times 3 = 0$

9.  $5 \times 3 = \boxed{\phantom{00}}$

10.  $3 \times \boxed{\phantom{00}} = 9$