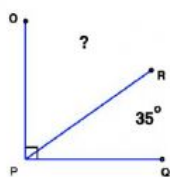
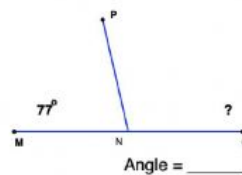


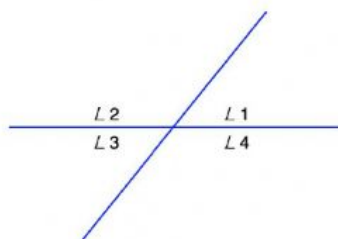
Identify the measure of the missing angle. Only put the measurement of the angle in the box. Remember to email your finished paper to your teacher. You must put your name, grade, and math in the blank



Angle = _____



Angle = _____

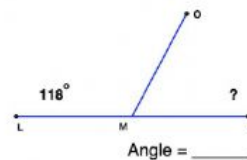


L 1 = _____

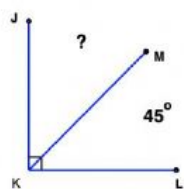
L 2 = 129°

L 3 = 51°

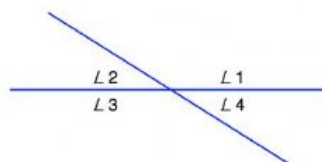
L 4 = _____



Angle = _____



Angle = _____



L 1 = 148°

L 2 = 32°

L 3 = _____

L 4 = _____