

Name: _____

Subtraction without Regrouping

Work out these subtraction problems with no regrouping.


WORKING OUT

- 1) There are 675 ants in a colony. 241 ants leave.




How many ants are there now?

There are _____ ants now.


- 2) A farmer plants 429 trees in a plantation. He cuts
 down 315 of the trees. How many trees are left?

There are _____ trees left.


- 3) Frazer has 486 marbles. Sally has 273 marbles.


How many more marbles does Frazer have?

Frazer has _____ more marbles than Sally.

- 4) There are 597 cars in a parking lot. 153 cars drive
 away. How many cars are there now?

There are _____ cars now.

- 5) Captain's electric car can travel 414 miles on a single
 charge. Tyger's car can travel 312 miles. What is the
difference?

The difference is _____ miles.