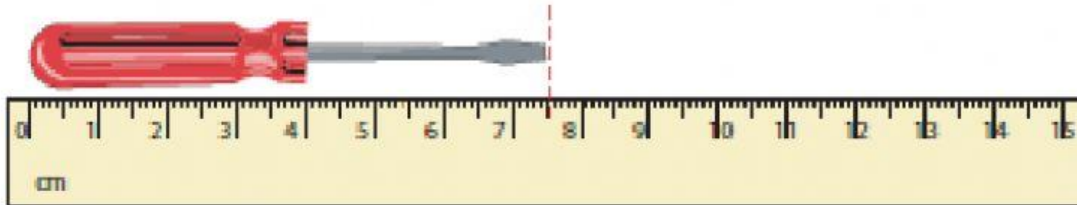


# Measuring Objects using a Ruler | cm

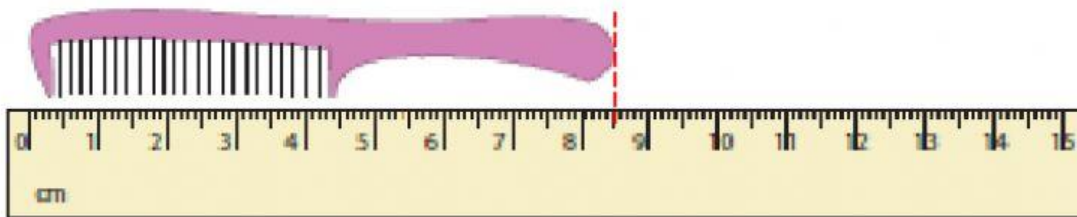
Measure each object using the ruler.

1)



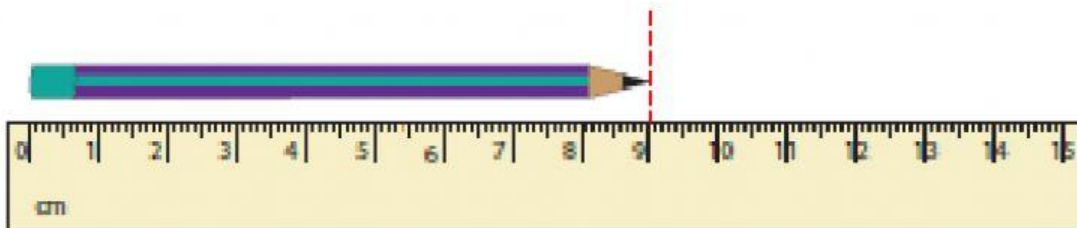
\_\_\_\_\_ cm

2)



\_\_\_\_\_ cm

3)



\_\_\_\_\_ cm

4)



\_\_\_\_\_ cm

5)



\_\_\_\_\_ cm

6)



\_\_\_\_\_ cm

1.  $3 \text{ m} = \underline{\hspace{2cm}} \text{ cm}$

2.  $5\text{m } 20 \text{ cm} = \underline{\hspace{2cm}} \text{ cm}$

3.  $4560 \text{ cm} = \underline{\hspace{1cm}} \text{ m } \underline{\hspace{1cm}} \text{ cm}$

4.  $3400 \text{ cm} = \underline{\hspace{2cm}} \text{ m}$

5.  $16 \text{ m} = \underline{\hspace{2cm}} \text{ cm}$

6.  $5\text{m } 45 \text{ cm} = \underline{\hspace{2cm}} \text{ cm}$

7.  $17\text{m} = \underline{\hspace{2cm}} \text{ cm}$

8.  $8\text{m } 5\text{cm} = \underline{\hspace{2cm}} \text{ cm}$