

Name:

Class:


Date:

Shapes

Worksheet 1

1 What is the 3D shape of each of the following objects?

(a)



(b)

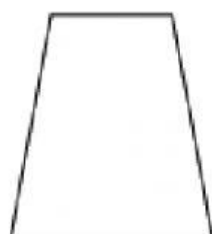


(c)

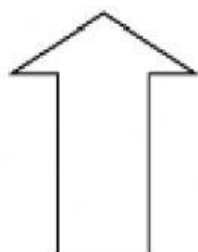


2 Write 'C' for closed figures and 'O' for open figures.


(a)



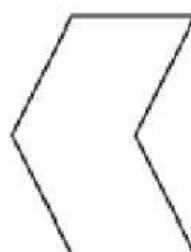
(b)



(c)



(d)



(e)

