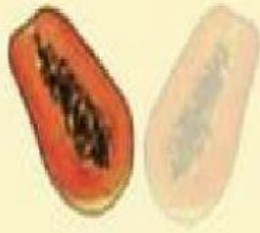



1 Which is one over two? Why?

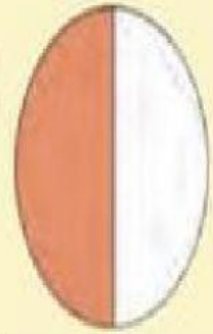
a



b



c




Choose correct answer

1 out of 2 equal parts

1 out of 4 equal parts

2 Which is one over four?


a



b



c



Choose correct answer

1 out of 2 equal parts

1 out of 4 equal parts

3 Name the fraction of the blue-shaded part.


a



b



c



Drag and Drop correct answer

a)

not a fraction

b)

one over two



c)

three over four

4 choose diagram that shows:

a

two over four.



4 choose diagram that shows:

b

three over four.

