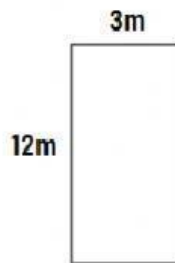


PERIMETER OF SQUARE AND RECTANGLE

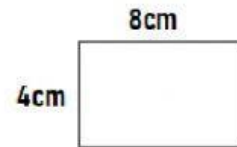
Calculate the perimeter of each figure.

1)




Perimeter =

2)



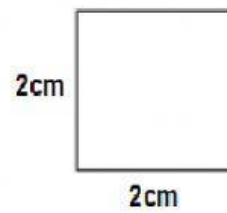
Perimeter =

3)



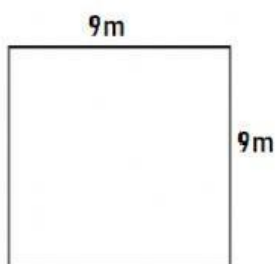
Perimeter =

4)



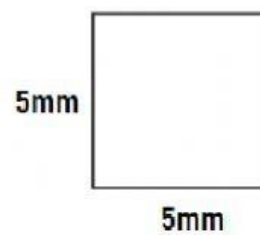
Perimeter =

5)



Perimeter =

6)



Perimeter =