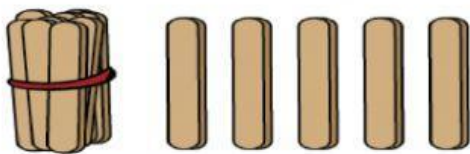
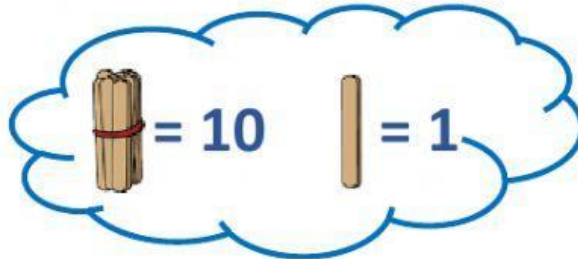


## COUNTING BUNDLE OF TENS AND ONES

Each bundle has 10 sticks. Count the group of tens and ones. Then write the correct number of tens and ones in the boxes to the right.




Tens	Ones
1	5

The number is 15.



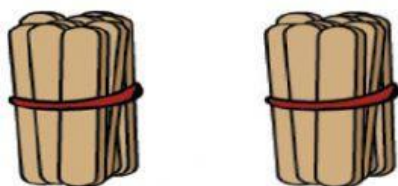
Tens	Ones

The number is \_\_\_\_\_



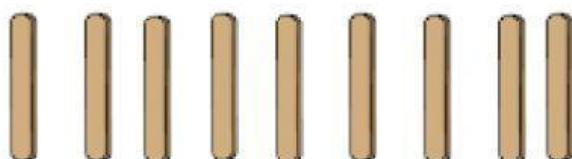
Tens	Ones

The number is \_\_\_\_\_




Tens	Ones

The number is \_\_\_\_\_




Tens	Ones

The number is \_\_\_\_\_




Tens	Ones

The number is \_\_\_\_\_



Tens	Ones

The number is \_\_\_\_\_



Tens	Ones

The number is \_\_\_\_\_