


5. Draw the hands on the clock and write the time.


Example



10.25

Start

35 min
Duration



11.00

End

(a)



Start

10 min
Duration




End

(b)



Start

45 min
Duration



End

(c)



Start

5 min
Duration



End

(d)



Start

50 min
Duration



End

(e)



Start

40 min
Duration



End