







- A. Tandakan (✓) pada benda hidup.
Tandakan (×) pada benda bukan hidup.

*Tick (✓) for the living things.
Cross (X) for the non-living things.*



B. Kelaskan benda-benda berikut dengan betul.
Tulis nama benda di dalam jadual yang diberi.


*Group the things below correctly.
Write the names of the things in the table given.*




yoyo
yo-yo



ibu
mother




gitar
guitar



lembu
cow



pokok ubi
tapioca plant



kereta
car



burung
bird



teko
pot

Benda hidup <i>Living Things</i>	Benda bukan hidup <i>Non-Living Things</i>
①	①
②	②
③	③
④	④

Ciri-ciri Benda Hidup / Characteristics of Living Things

A. Tulis ciri benda hidup berdasarkan gambar.

Write the characteristics of living things based on the pictures.



bergerak
move

membesar
grow


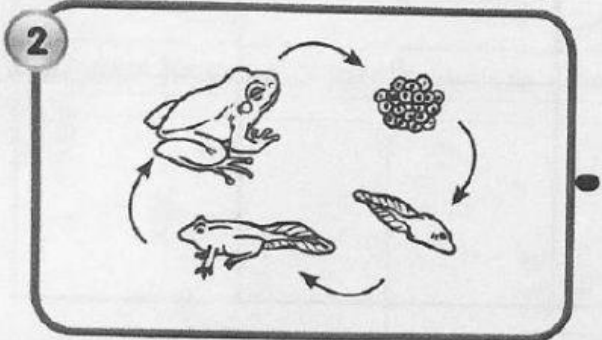

bernafas
breathe

membang
reproduce

perlu makanan dan air
need food and water



B. Padankan gambar dengan ciri-ciri benda hidup.
Match the pictures to the characteristics of living things.



Benda hidup perlukan makanan dan air.

Living things need food and water.

Benda hidup bernafas.

Living things breathe.

Benda hidup bergerak.

Living things move.

Benda hidup membesar.

Living things grow.

Benda hidup membiak.

Living things reproduce.

3.1.1 Membanding dan membezakan benda hidup dan benda bukan hidup berdasarkan ciri-ciri berikut :
 (i) bernafas (ii) memerlukan air dan makanan (iii) bergerak (iv) membesar (v) membiak


A. Tulis keperluan asas yang diperlukan oleh benda hidup.

Write the basic needs of living things.

makanan
food

air
water

udara
air




A. Tulis pernyataan yang betul pada gambar.
Write the correct statements for the pictures.


Melindungi daripada panas
Protect from heat

Melindungi daripada hujan
Protect from rain

Melindungi daripada bahaya
Protect from danger







B. Isi tempat kosong dengan jawapan yang betul.

Fill in the blanks with the correct answers.

Unit 3

Lembaran Kerja 9

TP 3

Air
Water

Udara
Air

Tempat perlindungan
Shelter

Makanan
Food

1.



_____ dapat memberi tenaga, menjaga kesihatan dan membantu tumbesaran.

_____ gives us energy, helps us to stay healthy and helps us to grow.

2.



_____ dapat menghilangkan dahaga dan menggantikan air yang hilang dari dalam badan.

_____ helps to quench thirst and replace water lost from the body.

3.



_____ membolehkan manusia, haiwan dan tumbuhan bernafas.

_____ helps human beings, animals and plants to breathe.

4.



_____ melindungi manusia dan haiwan daripada hujan, panas dan bahaya.

_____ protects human beings and animals from rain, sun dan danger.