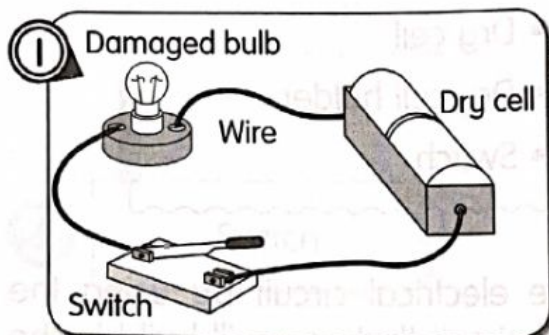


Performance Level (PL):

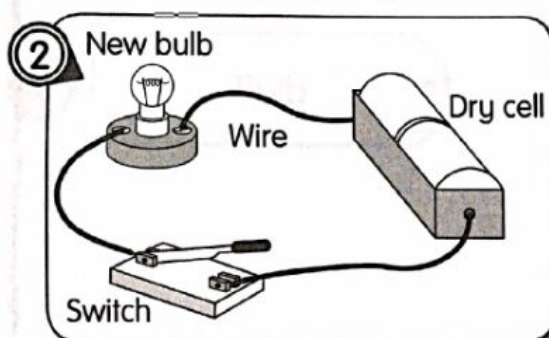
PL 4 Provide reasoning when bulbs do not light up in a circuit.

Observe the pictures carefully. Predict the condition of the bulb when the switch is closed in the electric circuit. Mark (✓) the correct answer. **PL 4**



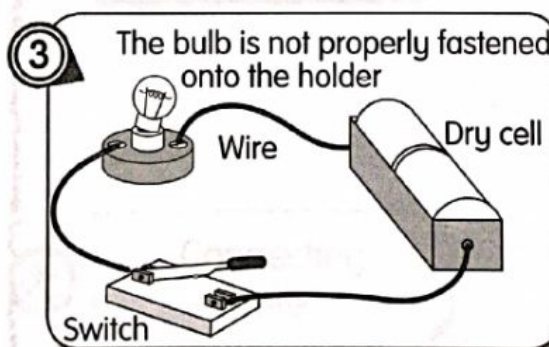
The bulb will light up ☐

The bulb will not light up ☐



The bulb will light up ☐

The bulb will not light up ☐



The bulb will light up ☐

The bulb will not light up ☐

LS 7.1.4 Predict why bulb does not light up in a circuit.