



# LIFE INTERNATIONAL SCHOOL

## QUARTER 1 EXAM IN SOCIAL STUDIES

### Grade 1B

Name: \_\_\_\_\_ Date: \_\_\_\_\_ Score: \_\_\_\_ / 30

A. Identify the following classroom rules base in the picture. (10 points)



Turn on the light

Close the door

May I come in?

May I join you?

Look at the board

Open the window

Give me the book, please




Turn off the light

Clean the board

B. Put x if the picture doesn't belong to community, put / if it belongs. (8 points)



C. Drag the pictures of different types rules we follow at. (6 points)

		
home	school	community

 raise your hand to ask a question	 wear a helmet when you ride your bike	 brush your teeth 2 times a day
 no computer until chores are done	 don't climb up the slide, slide down the slide	 cross the street in a crosswalk

**D. Label each picture with the correct action. (6 points)**

 <div></div>	<p>If you are playing with friends,</p>  <div></div>	 <div></div>
<p>If you have an assignment,</p>  <div></div>	 <div></div>	<p>If there is a new classmate,</p>  <div></div>

**Keep your  
community clean.**

**Take care of the  
Earth.**

**Be kind.**

**Share and  
cooperate.**

**Help your neighbor.**

**Be responsible.**

Great Job, you did it!

Jesus Loves You!