

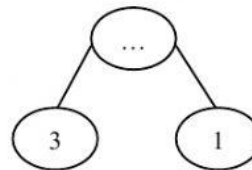

Worksheet MIE (Math In English)  
Chapter 5

Name / absent : .....  
Class : I .....  
Day / Date : .....

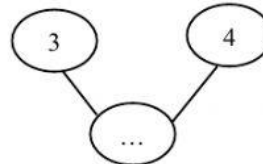
SCORE	Teacher's sign	Parent's sign

1. Write the missing Number

(a)



(b)



There are animals ... altogether

2. Count on

Write the missing number.

Example :



3, 4

(a)



5, ..., ..., ...

(b) There are 5 flowers in a vase.  
2 more flowers are added.



5, ..., ...

There are ... flowers in a vase altogether.

3. Complete

(a)



$$\boxed{\dots} + 4 = \boxed{\dots}$$

$$4 + \boxed{\dots} = \boxed{\dots}$$

(b)



$$5 + \boxed{\dots} = \boxed{\dots}$$

$$\boxed{\dots} + 5 = \boxed{\dots}$$

4. Complete and match

(a)

$$3 + 3 = \boxed{\dots}$$



(b)

$$4 + 0 = \boxed{\dots}$$



(c)

$$5 + 2 = \boxed{\dots}$$



5. Jane has 3 bears and 2 dolls.  
How many toys does she have in all?



$$\boxed{\dots} + \boxed{\dots} = \boxed{\dots}$$

She has ... toys in all