

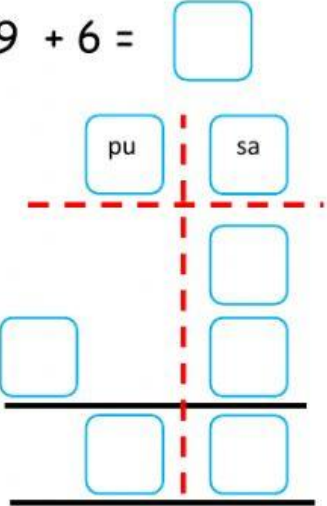
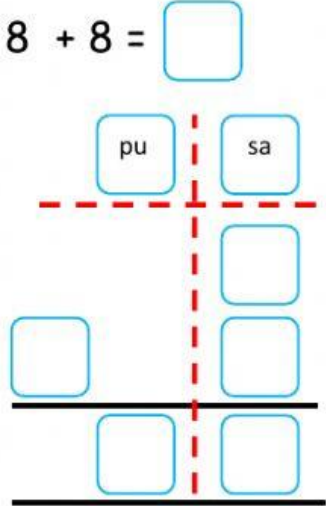
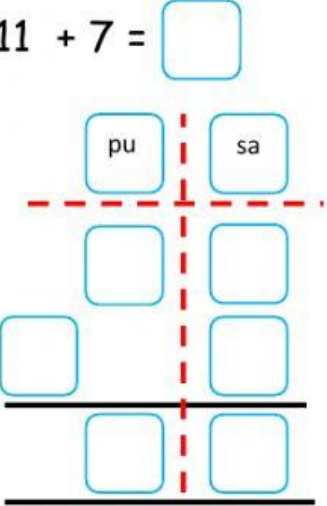
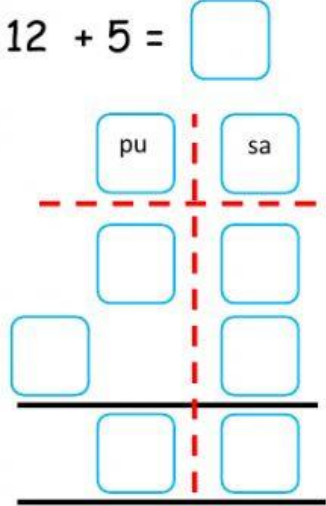
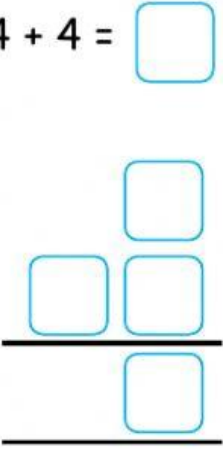
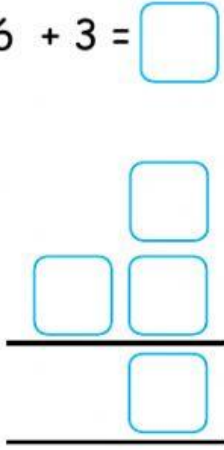
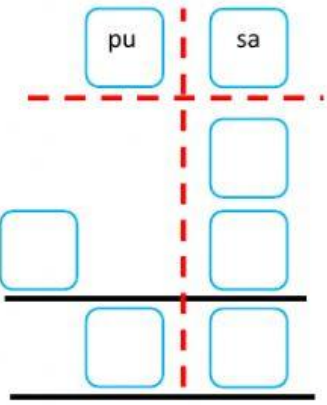
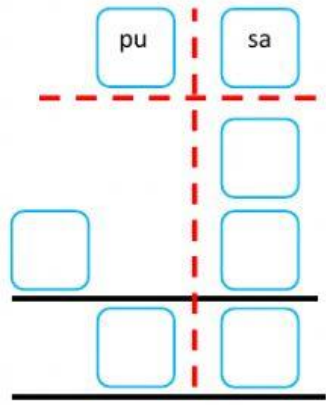
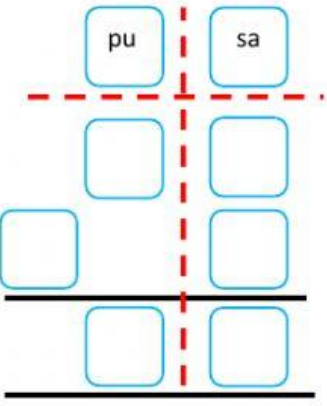


NAMA: \_\_\_\_\_

KELAS: \_\_\_\_\_

### Operasi Tambah Dalam Lingkungan 18

<p>1. <math>5 + 3 = \square</math></p> 	<p>2. <math>7 + 2 = \square</math></p> 
<p>3. <math>9 + 6 = \square</math></p> 	<p>4. <math>8 + 8 = \square</math></p> 
<p>5. <math>11 + 7 = \square</math></p> 	<p>6. <math>12 + 5 = \square</math></p> 

<p>7. <math>4 + 4 = \square</math></p> 	<p>8. <math>6 + 3 = \square</math></p> 
<p>9. <math>4 + 6 = \square</math></p> 	<p>10. <math>7 + 8 = \square</math></p> 
<p>11. <math>11 + 4 = \square</math></p> 	<p>12. <math>14 + 3 = \square</math></p> 