

Write the number that is squared and the square number for each of these diagrams.




Number Squared: 1

Square Number: 1




Number Squared: \_\_\_\_\_

Square Number: \_\_\_\_\_




Number Squared: \_\_\_\_\_

Square Number: \_\_\_\_\_




Number Squared: \_\_\_\_\_

Square Number: \_\_\_\_\_




Number Squared: \_\_\_\_\_

Square Number: \_\_\_\_\_




Number Squared: \_\_\_\_\_

Square Number: \_\_\_\_\_




Number Squared: \_\_\_\_\_

Square Number: \_\_\_\_\_



Number Squared: \_\_\_\_\_

Square Number: \_\_\_\_\_



Number Squared: \_\_\_\_\_

Square Number: \_\_\_\_\_