

# Which unit of volume is best for measuring each object? Classify the objects by the unit.

Name: \_\_\_\_\_

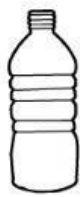
1. Color and cut out the pictures.
2. Draw your own pictures in the blank squares.
3. Classify the pictures by the best unit to measure, liter or milliliter.

**Liter**

**Milliliter**



Paint



Water



Lemonade



Tea



Medicine



Milk



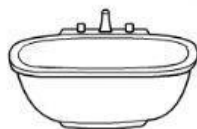
Glue



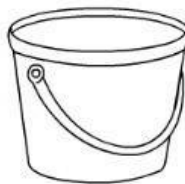
Soda



Shampoo



Bathtub



Pail



Juice

